

NAME: _____

DATE: _____

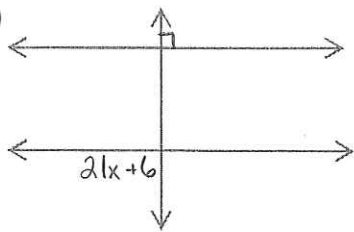
HOUR: _____

5⁺

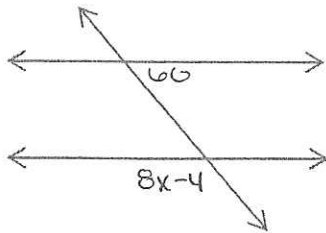
Section 3.2 Review

For each of the following use what we know about vertical angles, linear pairs, and our new properties with parallel lines to solve for x and y .

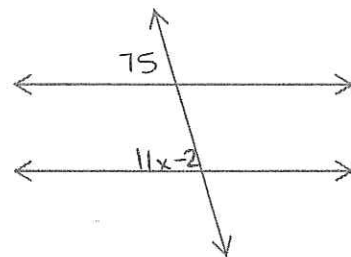
1)



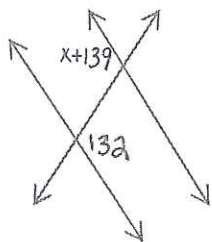
2)



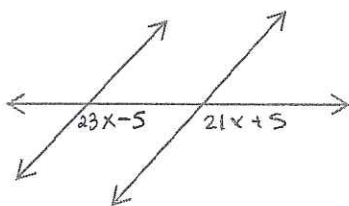
3)



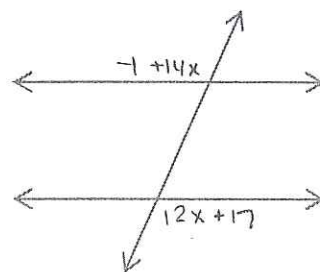
4)



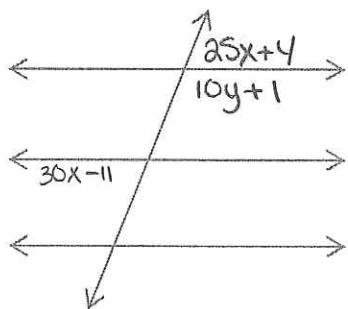
5)



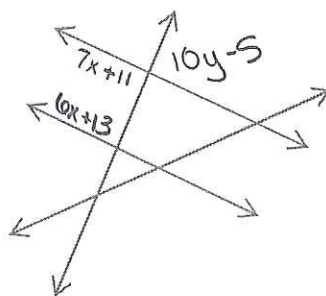
6)



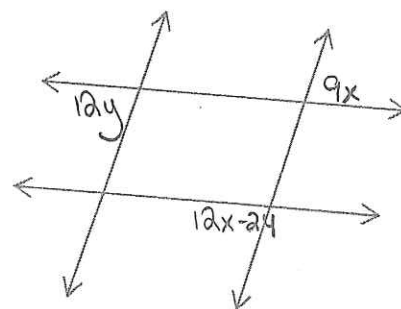
7)



8)



9)



For each of the following use what we know about vertical angles, linear pairs, and our new properties with parallel lines to solve for x . Once you know x also solve for all the angles in the image!!!

